


1

Circle the set that equals this one. ● ●




2

Count the dollars. How many are there?



3


Circle the ABAB pattern.



4

Put dots in the circle for the number given.


3



5

Put dots in the circle for the number given.

2



1

Count the cars. How many are there?



2

4

3

2

Circle the ABAB pattern.



3

Which set equals this one?



4

Circle September 4.

September

Sunday	Monday	Tuesday	Wednesday	Thursday	Friday	Saturday
					1	2
3	4	5	6	7	8	9
10	11	12	13	14	15	16
17	18	19	20	21	22	23
24	25	26	27	28	29	30

5

Mark (X) 2 days later.

- 1 How many paperclips apart are these 2 race cars? _____ paperclips



- 2 How many cars do you count?



3

5

4


- 3 Which symbol means equals?

+


=

>

4 Make a set of 1 in this circle.



5 How many flags are there altogether?




1

Which symbol means equals?

+ - =


2

Make a set of 5 coins in this circle.



3

How many jewels are there?





1



5

3

4 Circle the ABAB pattern.



5 How many jewels are there altogether?

 $+$  $=$ _____

1

How many ships are there altogether?



2

Circle the ABAB pattern.



3 How many treasure chests do you count?




1

3

2


4 How many paperclips long is this jewel?



_____ paperclips



5 Make a set of 3 coins in the circle.



1 Circle November 2.

November

Sunday	Monday	Tuesday	Wednesday	Thursday	Friday	Saturday
1	2	3	4	5	6	7
8	9	10	11	12	13	14
15	16	17	18	19	20	21

2 Mark (X) 3 days later.

3 Measure the length of the treasure chest using paperclips. How many paperclips long is it?



_____ paperclips



4

Circle the ABAB pattern.



5

How many pirates are there?



2

3

4

1

How many paperclips long is this worm?



2

1

4

2

How many worms are there?





2

5

3


3

Circle the ABAB pattern.



- 4** Make a set of 2 carrots in the circle.

2



- 5** Circle the symbol that means the same or equals.

=

x

>

- 1** Mark (X) the symbol that means the same or equals.

+ > =

- 2** How many paperclips long is this carrot?



2

3

4


- 3** Put an X on the date that is 2 days later than March 1.

March

Sunday	Monday	Tuesday	Wednesday	Thursday	Friday	Saturday
	1	2	3	4	5	6
7	8	9	10	11	12	13

4

How many onions do you see?



3

4

5

5

Circle the ABAB pattern.



1

How many strawberries do you count?




3

5

4

2

Make a set of 2 pumpkins in the circle.



3

Count the cabbages. How many are there?




3

5

2


4

Circle the set that equals this set:




5

How many carrots altogether?



+



=

2

3